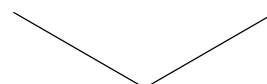
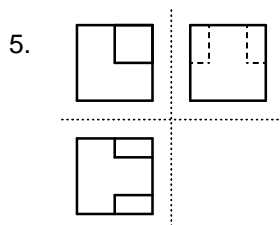
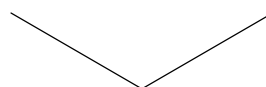
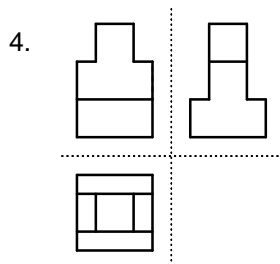
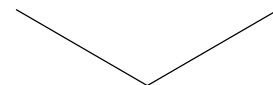
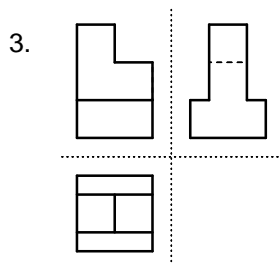
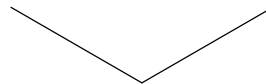
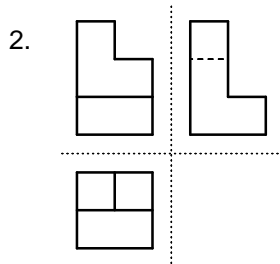
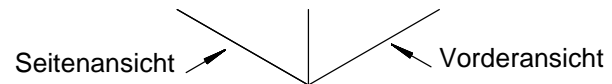
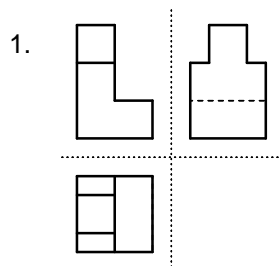


**Aufgabe:** Zeichne die Körper in der Isometrischen Projektion  
im Maßstab 2 : 1!



© TS

Benennung: <b>ISOMETRISCHE PROJEKTIONEN 1 - 5 ZUM QUIZ 3</b>				Blatt-Nr: _____
Maßstab: _____	Geprüft: _____	Datum: _____	Name: _____	Klasse: _____
				TS 2004