

Aufgaben im Zahlenraum bis 50

1 Plusaufgaben

$11 + 16 = \underline{\quad}$

$\underline{\quad} + 18 = 41$

$3 + \underline{\quad} = 41$

$5 + 20 = \underline{\quad}$

$\underline{\quad} + 23 = 41$

$9 + \underline{\quad} = 24$

$31 + 1 = \underline{\quad}$

$\underline{\quad} + 3 = 20$

$14 + \underline{\quad} = 41$

$37 + 5 = \underline{\quad}$

$\underline{\quad} + 17 = 27$

$35 + \underline{\quad} = 43$

$31 + 10 = \underline{\quad}$

$\underline{\quad} + 6 = 46$

$17 + \underline{\quad} = 43$

2 Minusaufgaben

$47 - 2 = \underline{\quad}$

$\underline{\quad} - 23 = 8$

$\underline{\quad} - 2 = 27$

$46 - 24 = \underline{\quad}$

$\underline{\quad} - 32 = 7$

$\underline{\quad} - 30 = 6$

$41 - 4 = \underline{\quad}$

$\underline{\quad} - 38 = 6$

$\underline{\quad} - 25 = 10$

$36 - 3 = \underline{\quad}$

$\underline{\quad} - 8 = 33$

$\underline{\quad} - 13 = 20$

$39 - 14 = \underline{\quad}$

$\underline{\quad} - 15 = 15$

$\underline{\quad} - 9 = 30$

3

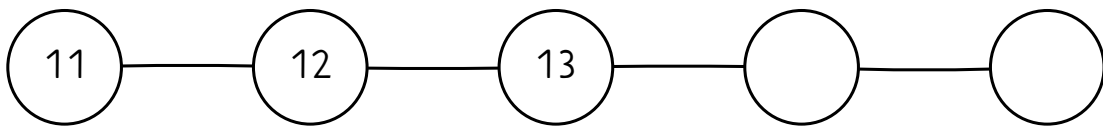
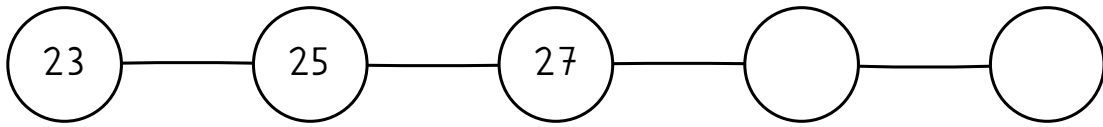
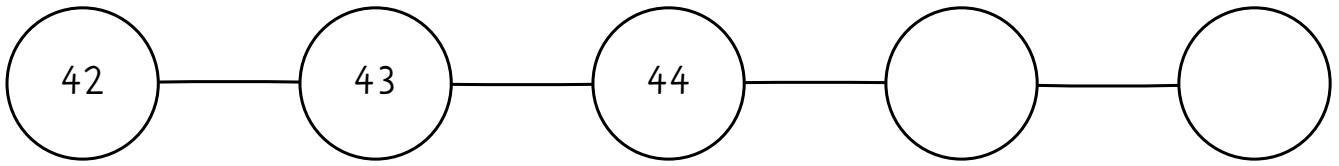
Zahlenhaus: Beachte die Zahl im Dach!

| | |
|----|--|
| 40 | |
| 23 | |
| 33 | |
| 26 | |
| 31 | |
| 32 | |

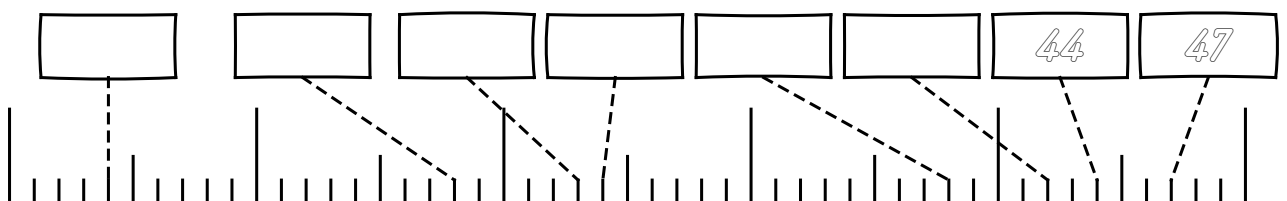
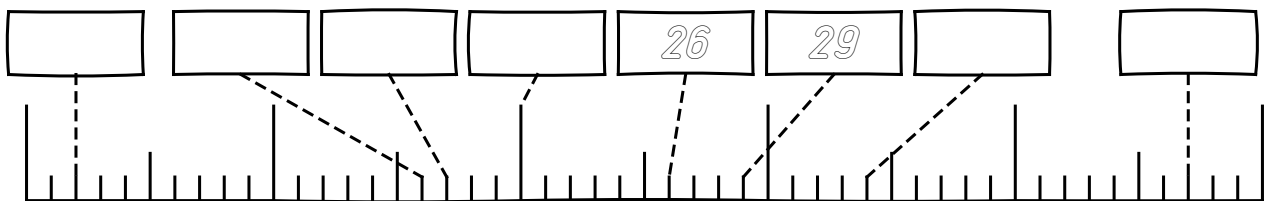
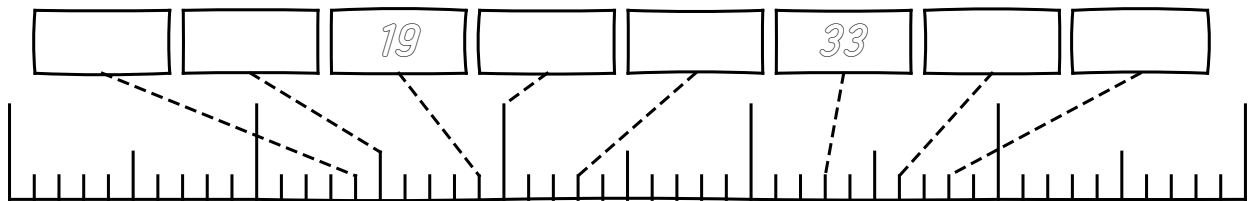
| | |
|----|----|
| 31 | |
| | 20 |
| | 0 |
| | 2 |
| | 17 |
| | 25 |

| | |
|----|----|
| 39 | |
| | 24 |
| 30 | |
| 32 | |
| | 36 |
| 24 | |

4 Welche Zahl folgt?

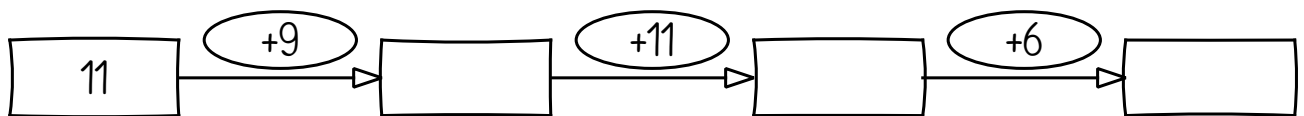
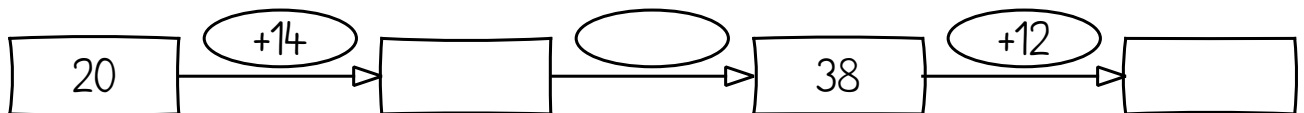

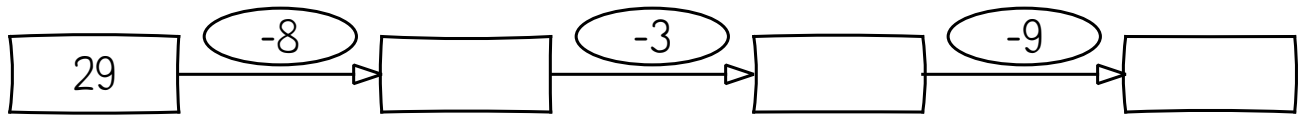
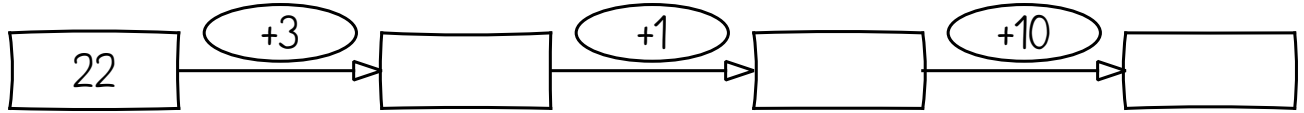



5 Zahlenstrahl: Trage die fehlenden Zahlen in die Kästchen ein



6

Rechne Plus und Minus. Achte auf die Zeichen + oder -



7

Rechne Plus und Minus. Achte auf die Zeichen + oder -

