

Aufgaben im Zahlenraum 10

1.

$8 + 2 = \underline{10}$

$7 + 2 = \underline{9}$

$1 + 9 = \underline{10}$

$2 + 7 = \underline{9}$

$5 + 2 = \underline{7}$

$8 + 2 = \underline{10}$

$1 + 5 = \underline{6}$

$4 + 2 = \underline{6}$

$5 + 3 = \underline{8}$

$7 + 2 = \underline{9}$

$6 + 2 = \underline{8}$

$1 + 6 = \underline{7}$

$8 + 1 = \underline{9}$

$2 + 1 = \underline{3}$

$2 + 5 = \underline{7}$

$2 + 8 = \underline{10}$

2.

$6 - 1 = \underline{5}$

$9 - 6 = \underline{3}$

$8 - 7 = \underline{1}$

$5 - 2 = \underline{3}$

$9 - 5 = \underline{4}$

$7 - 5 = \underline{2}$

$6 - 2 = \underline{4}$

$6 - 1 = \underline{5}$

$9 - 3 = \underline{6}$

$5 - 1 = \underline{4}$

$7 - 2 = \underline{5}$

$8 - 2 = \underline{6}$

$6 - 2 = \underline{4}$

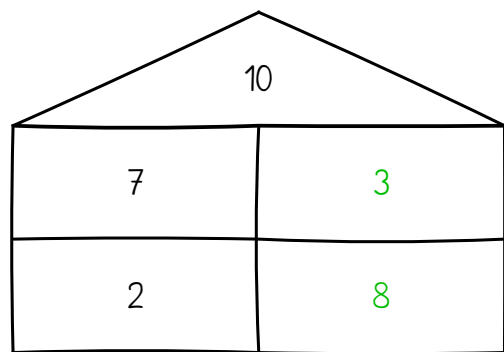
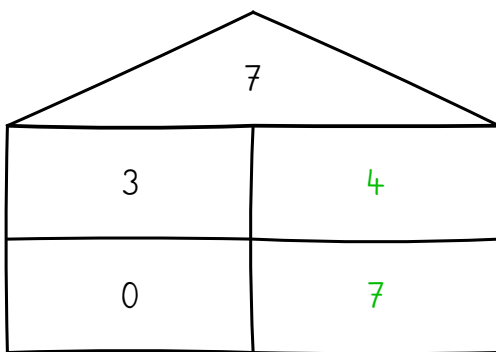
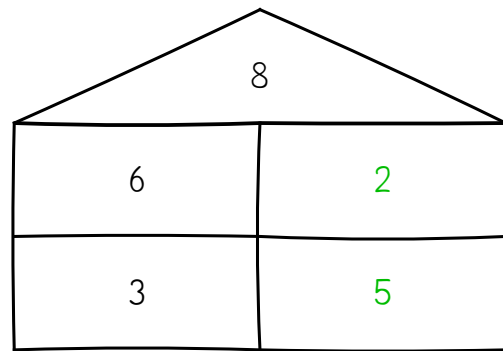
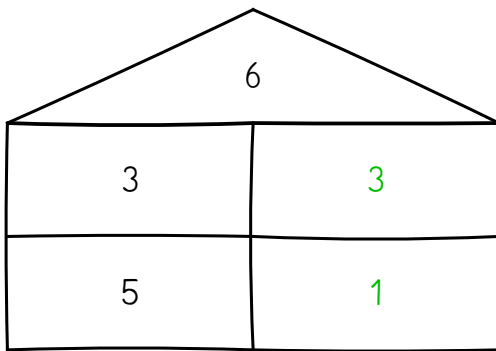
$10 - 5 = \underline{5}$

$7 - 5 = \underline{2}$

$7 - 4 = \underline{3}$

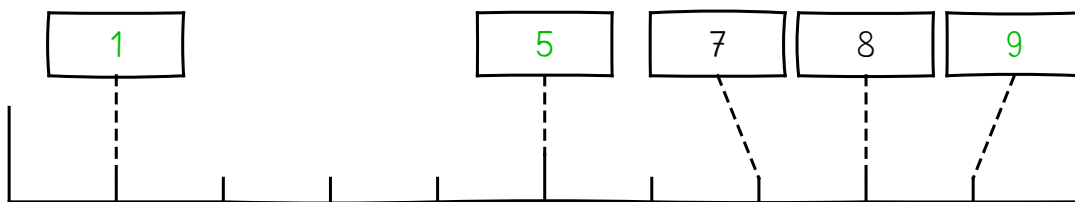
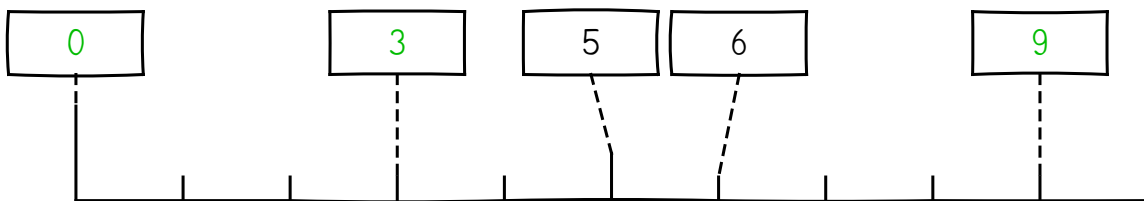
3.

Zahlenhaus: Beachte die Zahl im Dach!



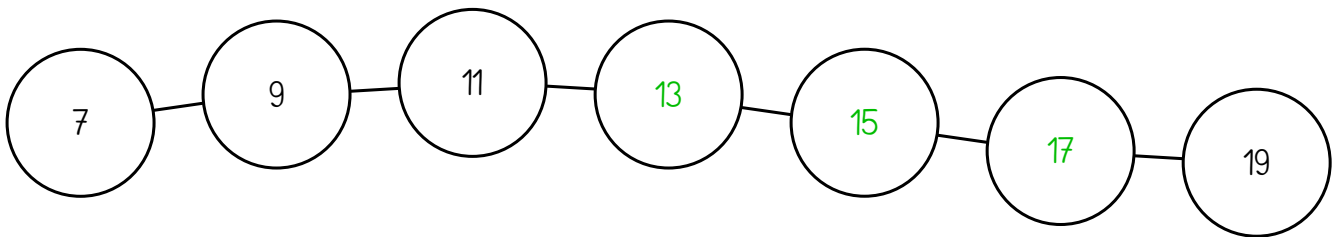
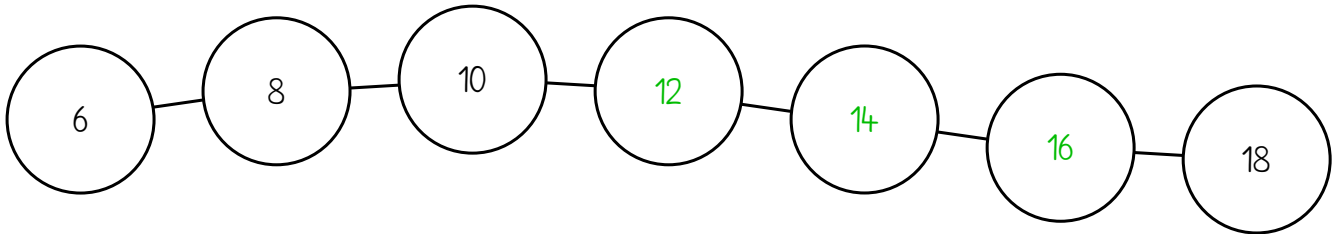
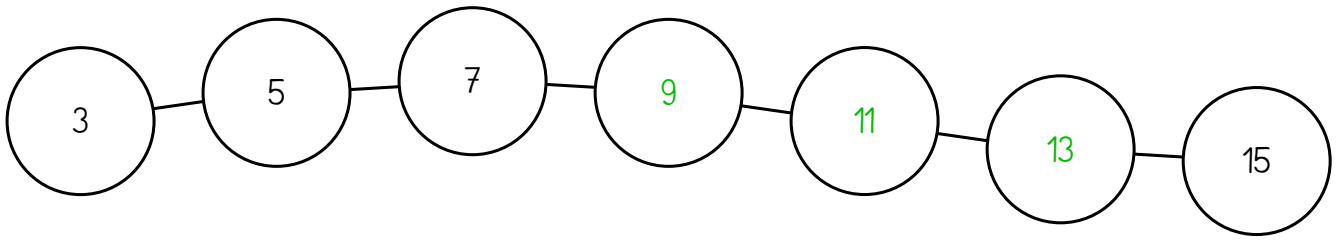
4.

Zahlenstrahl



5.

Zahlenkette: Welche Zahl folgt?



6.

Rechne plus und minus. Achte genau auf die Zeichen: + oder -

