

Aufgaben im Zahlenraum bis 20

1 Plusaufgaben

$$\begin{array}{lll} 1 + 18 = \underline{19} & \underline{5} + 9 = 14 & 3 + \underline{8} = 11 \\ 7 + 1 = \underline{8} & \underline{12} + 3 = 15 & 6 + \underline{6} = 12 \\ 12 + 8 = \underline{20} & \underline{14} + 2 = 16 & 7 + \underline{6} = 13 \\ 11 + 2 = \underline{13} & \underline{9} + 10 = 19 & 4 + \underline{9} = 13 \\ 10 + 5 = \underline{15} & \underline{13} + 7 = 20 & 7 + \underline{5} = 12 \end{array}$$

2 Minusaufgaben

$$\begin{array}{lll} 17 - 4 = \underline{13} & \underline{19} - 1 = 18 & \underline{12} - 7 = 5 \\ 15 - 1 = \underline{14} & \underline{15} - 11 = 4 & \underline{19} - 3 = 16 \\ 17 - 14 = \underline{3} & \underline{12} - 1 = 11 & \underline{13} - 3 = 10 \\ 17 - 8 = \underline{9} & \underline{14} - 13 = 1 & \underline{14} - 2 = 12 \\ 17 - 16 = \underline{1} & \underline{13} - 5 = 8 & \underline{15} - 9 = 6 \end{array}$$

3 Zahlenhaus: Beachte die Zahl im Dach!

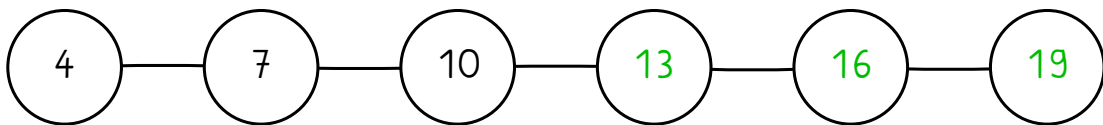
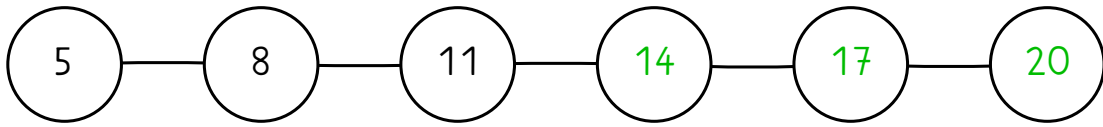
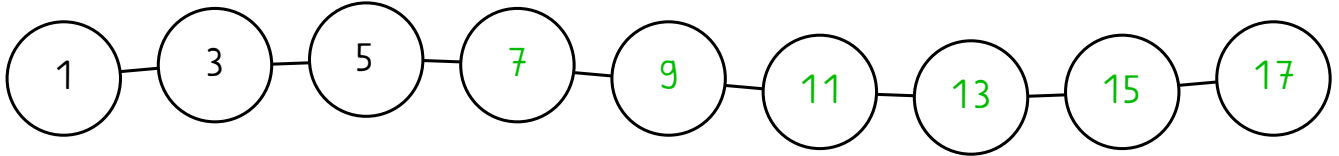
13	
13	0
7	6
11	2
6	7
4	9

16	
16	0
3	13
10	6
13	3
2	14

15	
1	14
4	11
7	8
9	6
0	15

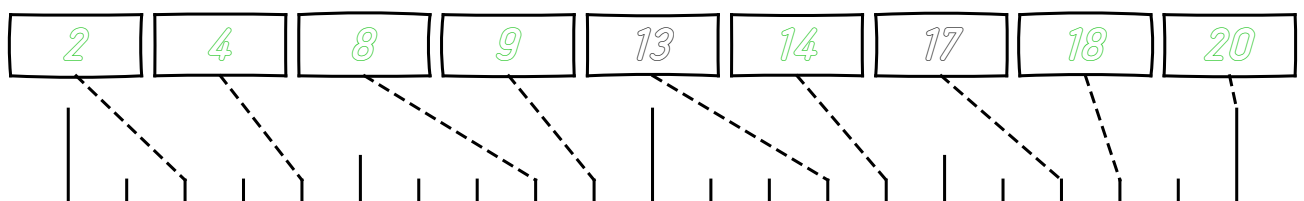
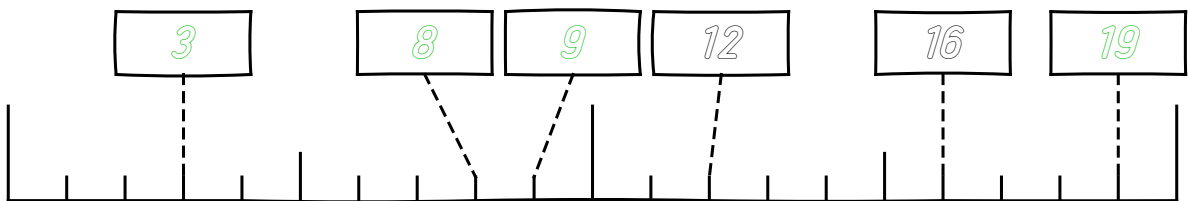
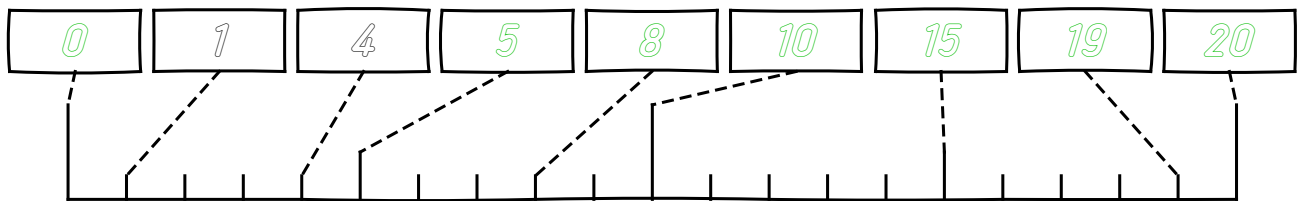
4

Welche Zahl folgt?



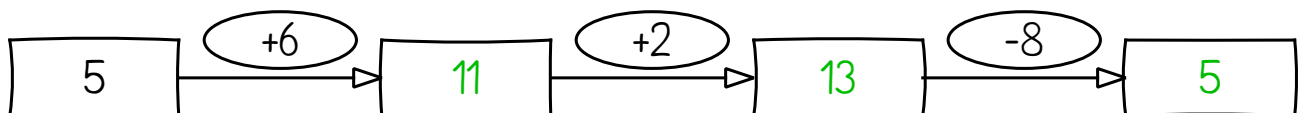
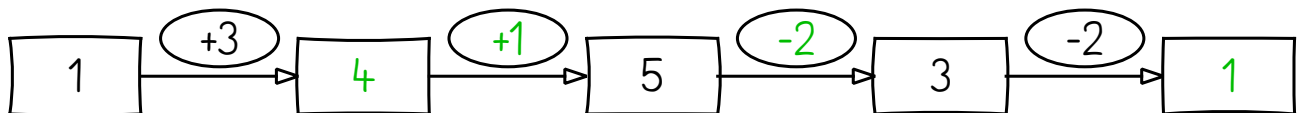
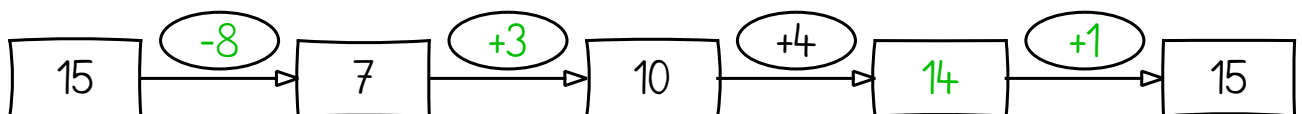
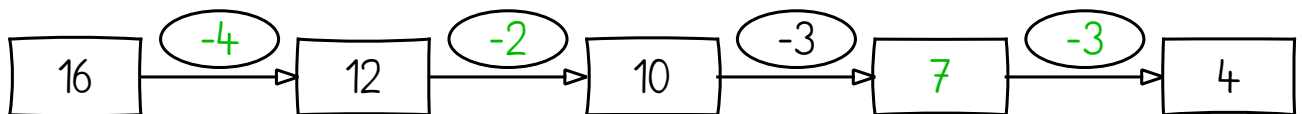
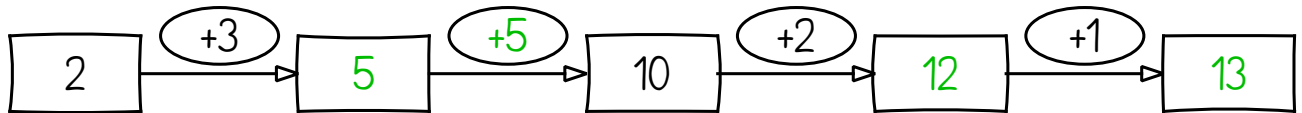
5

Zahlenstrahl: Trage die fehlenden Zahlen in die Kästchen ein



6

Rechne plus und minus. Achte auf die Zeichen + oder -



7

Rechne plus und minus. Achte auf die Zeichen + oder -

