

Aufgaben im Zahlenraum bis 100

1 Plusaufgaben

$60 + 15 = \underline{75}$

$\underline{36} + 61 = 97$

$77 + \underline{4} = 81$

$5 + 57 = \underline{62}$

$\underline{24} + 49 = 73$

$79 + \underline{12} = 91$

$3 + 9 = \underline{12}$

$\underline{63} + 19 = 82$

$56 + \underline{8} = 64$

$10 + 59 = \underline{69}$

$\underline{85} + 13 = 98$

$85 + \underline{7} = 92$

$75 + 3 = \underline{78}$

$\underline{73} + 16 = 89$

$65 + \underline{27} = 92$

2 Minusaufgaben

$51 - 25 = \underline{26}$

$\underline{54} - 47 = 7$

$\underline{78} - 9 = 69$

$67 - 39 = \underline{28}$

$\underline{93} - 26 = 67$

$\underline{80} - 19 = 61$

$75 - 18 = \underline{57}$

$\underline{84} - 7 = 77$

$\underline{100} - 47 = 53$

$69 - 57 = \underline{12}$

$\underline{92} - 67 = 25$

$\underline{69} - 30 = 39$

$75 - 22 = \underline{53}$

$\underline{81} - 52 = 29$

$\underline{65} - 64 = 1$

3

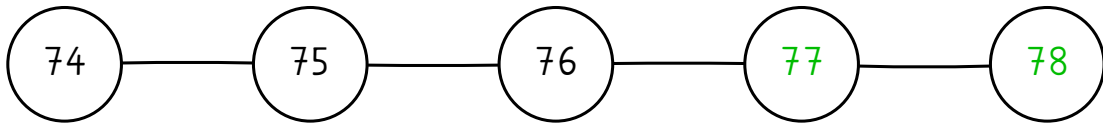
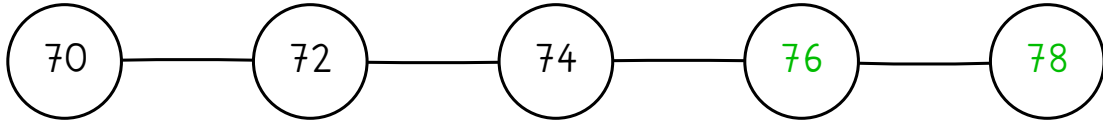
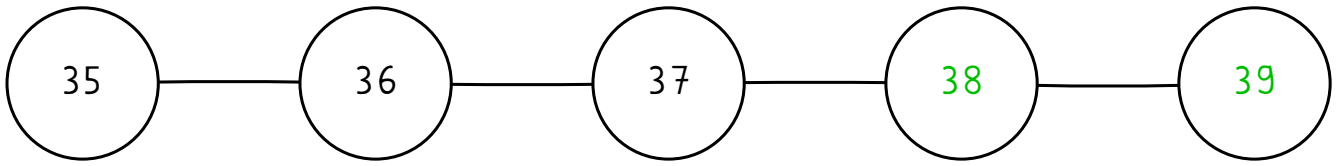
Zahlenhaus: Beachte die Zahl im Dach!

43	
15	28
23	20
25	18
19	24
9	34

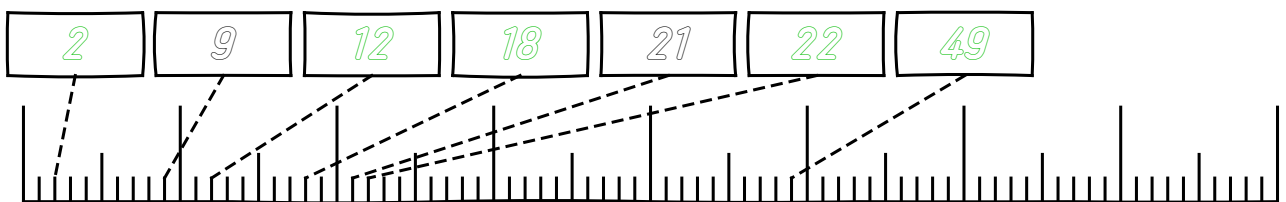
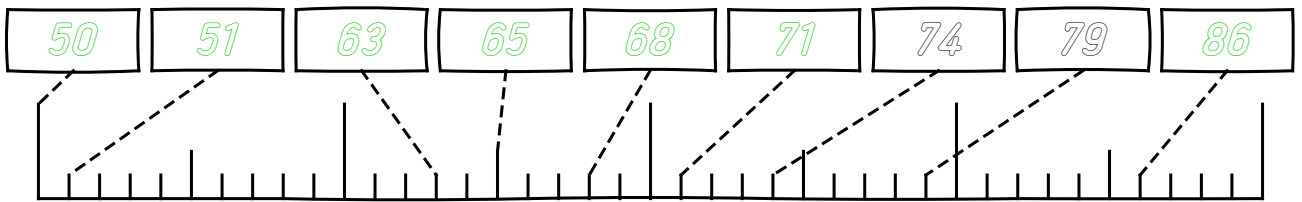
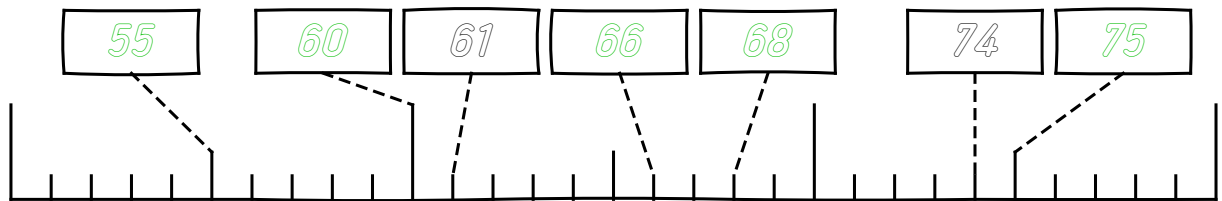
85	
1	84
49	36
85	0
31	54
39	46

73	
57	16
29	44
73	0
27	46
61	12

4 Welche Zahl folgt?

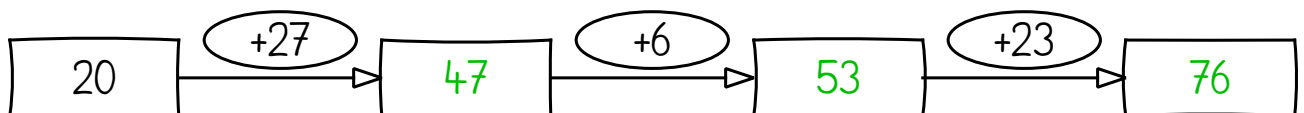
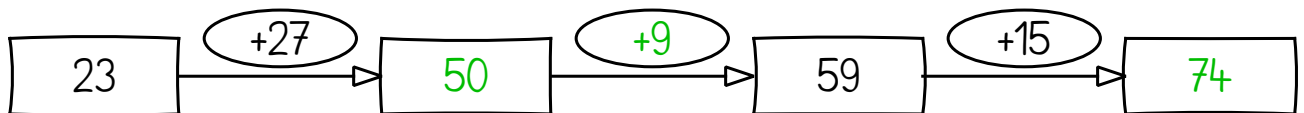
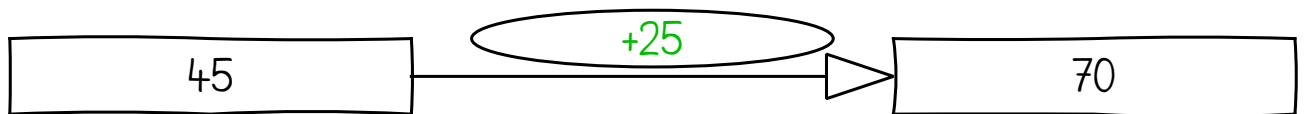
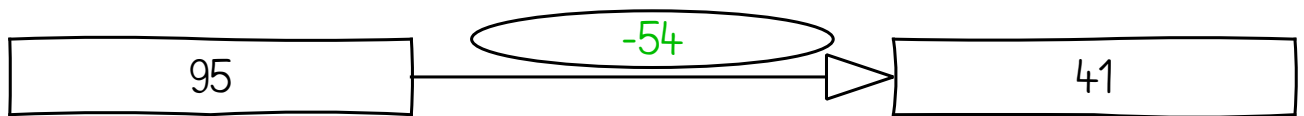
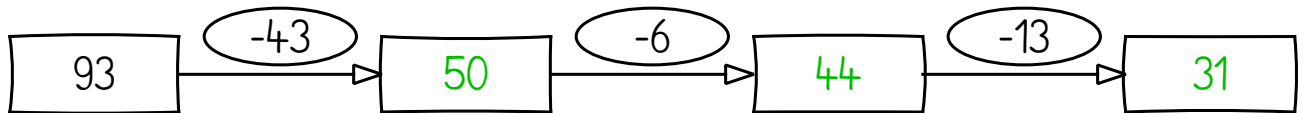

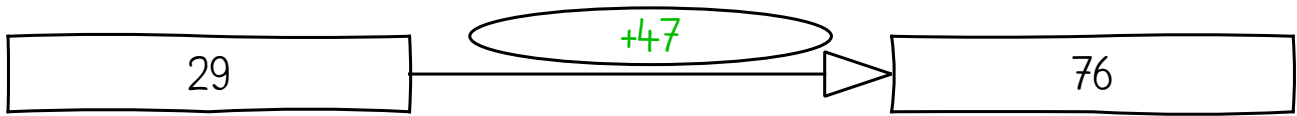


5 Zahlenstrahl: Trage die fehlenden Zahlen in die Kästchen ein



6

Rechne plus und minus. Achte auf die Zeichen + oder -



7

Rechne plus und minus. Achte auf die Zeichen + oder -

