

Aufgaben im Zahlenraum bis 50

1 Plusaufgaben

$11 + 16 = \underline{27}$

$\underline{23} + 18 = 41$

$3 + \underline{38} = 41$

$5 + 20 = \underline{25}$

$\underline{18} + 23 = 41$

$9 + \underline{15} = 24$

$31 + 1 = \underline{32}$

$\underline{17} + 3 = 20$

$14 + \underline{27} = 41$

$37 + 5 = \underline{42}$

$\underline{10} + 17 = 27$

$35 + \underline{8} = 43$

$31 + 10 = \underline{41}$

$\underline{40} + 6 = 46$

$17 + \underline{26} = 43$

2 Minusaufgaben

$47 - 2 = \underline{45}$

$\underline{31} - 23 = 8$

$\underline{29} - 2 = 27$

$46 - 24 = \underline{22}$

$\underline{39} - 32 = 7$

$\underline{36} - 30 = 6$

$41 - 4 = \underline{37}$

$\underline{44} - 38 = 6$

$\underline{35} - 25 = 10$

$36 - 3 = \underline{33}$

$\underline{41} - 8 = 33$

$\underline{33} - 13 = 20$

$39 - 14 = \underline{25}$

$\underline{30} - 15 = 15$

$\underline{39} - 9 = 30$

3

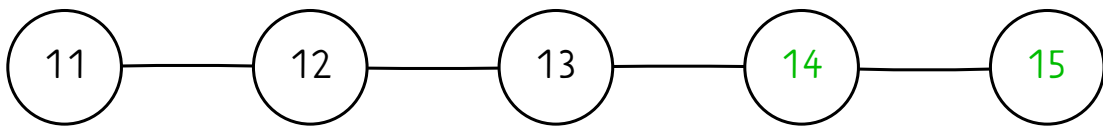
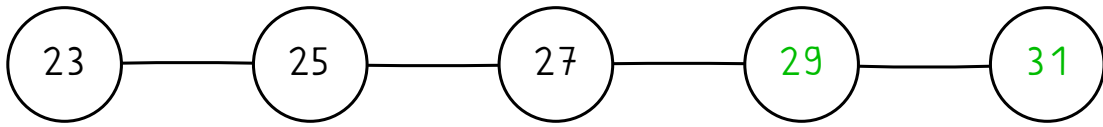
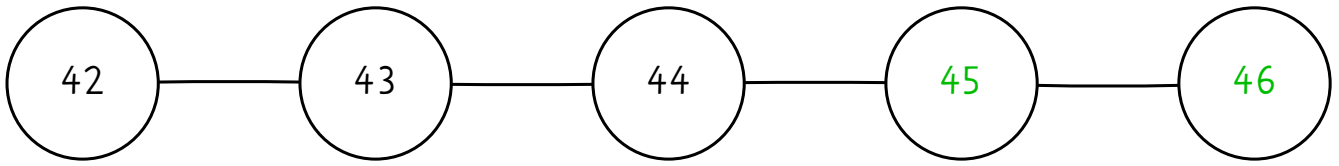
Zahlenhaus: Beachte die Zahl im Dach!

40	
23	17
33	7
26	14
31	9
32	8

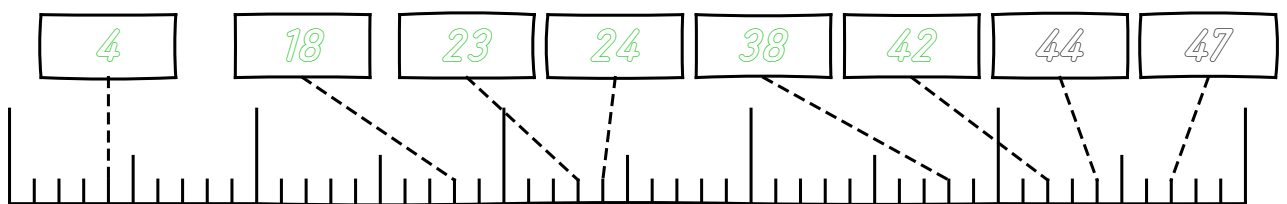
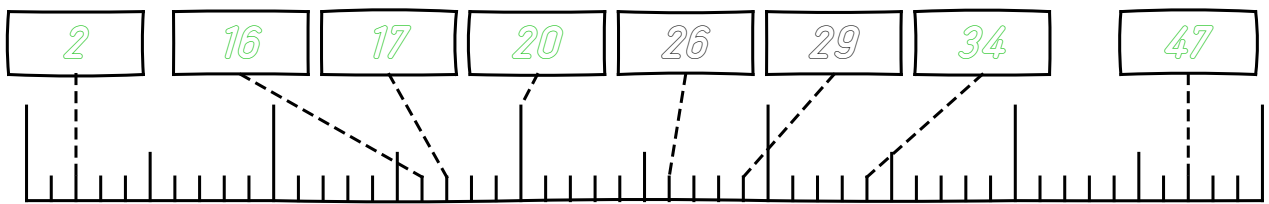
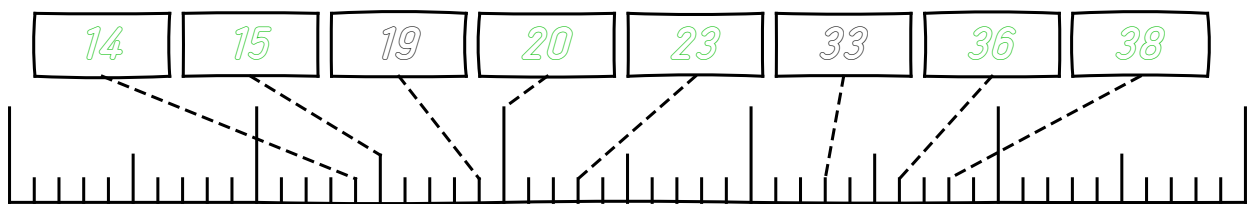
31	
11	20
31	0
29	2
14	17
6	25

39	
15	24
30	9
32	7
3	36
24	15

4 Welche Zahl folgt?

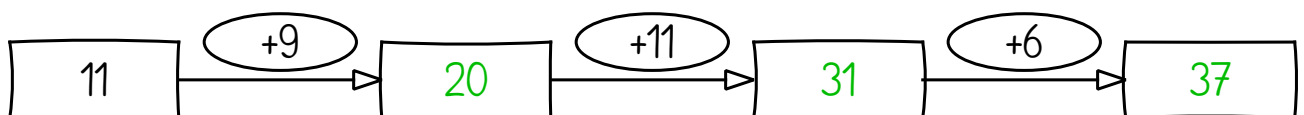
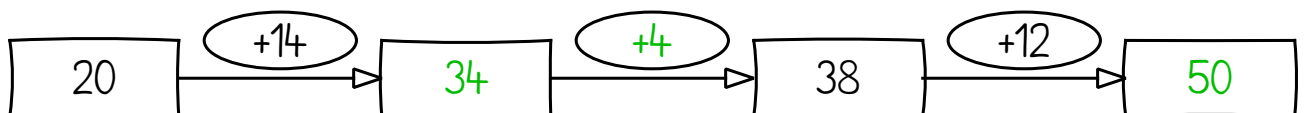

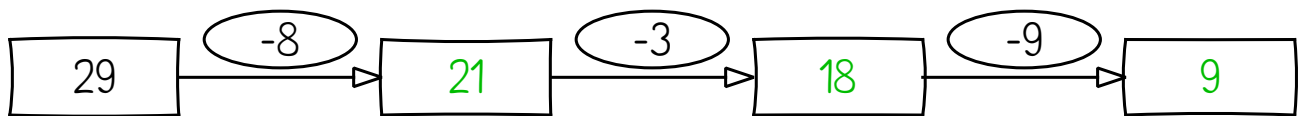
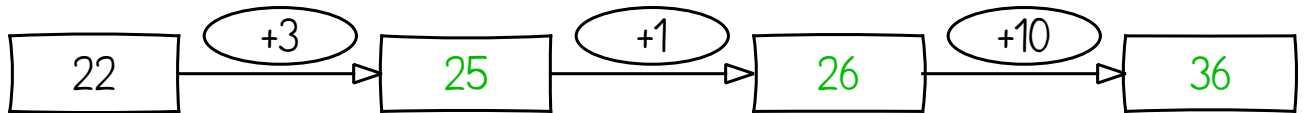
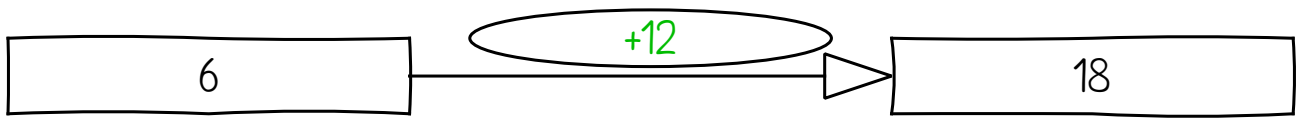


5 Zahlenstrahl: Trage die fehlenden Zahlen in die Kästchen ein



6

Rechne plus und minus. Achte auf die Zeichen + oder -



7

Rechne plus und minus. Achte auf die Zeichen + oder -

